



1. bus drives the driver the

---

2. bird the of on sat tree the pretty top the

---

3. it holiday is today a?

---

**Q.3 Write the opposites of the following. (4)**

a) ugly \_\_\_\_\_

b) long \_\_\_\_\_

c) friend \_\_\_\_\_

d) top \_\_\_\_\_

**Q.4 Write the plural of the following. (4)**

a) child \_\_\_\_\_

b) bus \_\_\_\_\_

a) tomato \_\_\_\_\_

b) monkey \_\_\_\_\_

**Q.5 Underline the nouns in these sentences. (4)**

a) The little black dog was called Appu.

b) She carried her bag to school.

**Q.6 Rewrite the sentences after changing the gender of the underlined words. (8)**

**(8)**

a) Father is cooking food for my mother.

---

b) Rekha's aunt is a nice woman.

---

c) Her grandmother offered me a piece of cake.

---

d) The lion chased the tiger.

---

**Q.7 Correct the Spellings.**

**(4)**

i) soldeirs \_\_\_\_\_

ii) fountian \_\_\_\_\_

iii) apeared \_\_\_\_\_

iv) recieve \_\_\_\_\_

**Q.8. Make sentences from the following words**

**(4)**

school \_\_\_\_\_

kite \_\_\_\_\_

**Q.9 Rewrite the sentences using capital letters, full stops and question marks.**

**(6)**

1) pooja went to bhopal with her mother

\_\_\_\_\_

2) mr and mrs singh went to anand

\_\_\_\_\_

3) where is tajmahal situated

\_\_\_\_\_

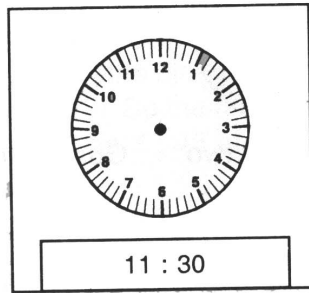


**Q2.**  
[4] **Do as directed:**

a) Can you read the clock and tell the time?



b) Draw the hands of the clock to show the time:



**Q3.**  
[4] **Write in words:**

a) 5032

\_\_\_\_\_

b) 4691

\_\_\_\_\_

**Q4.**  
[5] **Do as directed:**

a) **Arrange the following numerals in ascending order:**  
971, 938, 956, 902

\_\_\_\_\_

b) Give the smallest 3- digit number:

\_\_\_\_\_

c) Give the largest number by using the digits- 5,8, 0, and 6.

\_\_\_\_\_

d) How many days are there in one week?

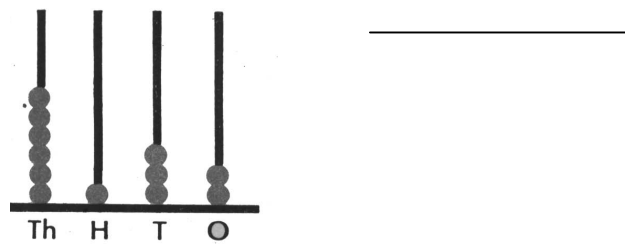
\_\_\_\_\_

e) Write 4,38,109 in expanded notation.

\_\_\_\_\_

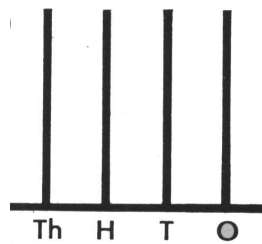
Q5.  
[2]

a) Read the abacus and write the numeral:



b) Show the numerals on the abacus:

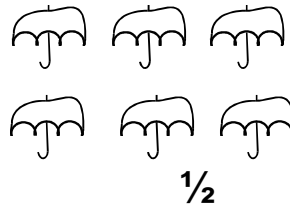
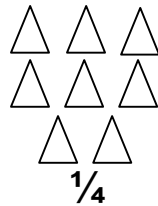
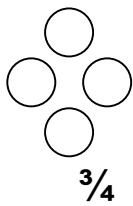
7,042



Working Space

Q6.  
[6]

Shade the following fraction given below in each set



Q7.  
[12]

Work out the following

1) 
$$\begin{array}{r} 4321 \\ + 8489 \\ \hline \\ \hline \end{array}$$

2) 
$$\begin{array}{r} 6501 \\ - 745 \\ \hline \\ \hline \end{array}$$

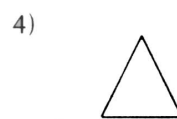
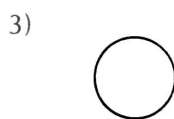
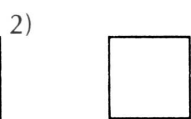

3) 
$$\begin{array}{r} 652 \\ \times 4 \\ \hline \\ \hline \end{array}$$

4) 
$$2 \overline{)62(}$$

**Q8.** Sheela has Rs. 56 in her piggy bank. Her father gave Rs. 38 more. How much money rupees does she have now?  
[4]

**Q9.** A fruit seller had 150 apples. He sold 78 of them. How many apples are now left with him?  
[4]

**Q10.** Name the following figures:  
[4]



-----

SWAMINARAYAN VIDYAPITH

CLASS IV

Model Papers

LIFE SKILLS

Total Marks: 50

Time: 40 minutes

Q1. Look at the 5 pictures. What do you think the people in the pictures are thinking? (5)




2.



3.



4.



5.



7.

Q.2 What would you do in each of these situations? Tick only one from the options provided, in the box.  
(8)

**i) You have a science test tomorrow; there is a lovely programme on T.V. You will**

- a) Watch T.V.
- b) Study first and then watch a bit of T.V.
- c) Study for the test
- d) Watch TV and study late in the night

**ii) Shabnam has been ill and has missed classwork. You**

- a) Give her your copies if she asks for them.
- b) Leave her alone.
- c) Tell her best friend to help her.
- d) Ask her if she wants help with what she has missed.

**iii) It is your classmate's birthday and she gives each of you 2 cream biscuits to eat. During recess, while you are munching yours, the girl sitting next to you accidentally drop hers on the ground. You**

- a) Do not mind giving her one of yours if she asks for it.
- b) Share one with her anyway.
- c) Ignore her.
- d) Offer to share with her, hoping that she will refuse it.

**iv) You are beginning to learn how to swim; you have heard it is difficult. You**

- a) Are scared but know you can learn.
- b) Are scared and try to find excuses not to try.
- c) Try once more and then give up.
- d) tell your parents you may or may not learn.

**v) You have had a fight with a friend. You**

- a) Say “sorry” and make up, if you were wrong?
- b) Wait for the other person to make up with you?
- c) Form a group and fight with the child?
- d) Act as though you never had a fight.

**vi) Your teacher comes to the class with an ink mark above her lip. She looks funny. What will you do?**

- a) Join the class and laugh slyly.
- b) Exchange remarks with other students on a strip of paper.
- c) Ignore the situation and pretend it has not happened.
- d) Walk up to her, and quietly tell her about it.

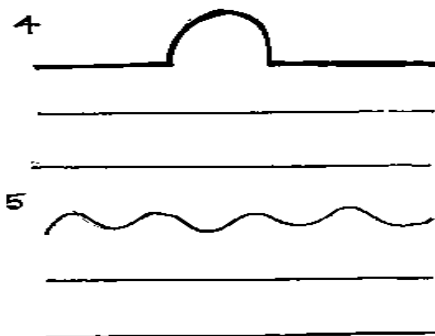

**vii) You fail in a test for the first time. You**

- a) Don't want anyone to see it and hide the test paper.
- b) Know you can do better and try to find your mistakes.
- c) Feel the teacher has made a mistake.
- d) Decide you will do better next time.

**viii) You have broken a school rule. When a teacher finds out she shouts at you and**

- a) You tell the teacher she is wrong and that you will tell your father about it.
- b) You keep quiet but decide to tell all your friends how the teacher holds grudges against you
- c) Accept that you did break the rule and apologise for it.
- d) Accept that you did break the rule, show your willingness to accept the punishment, but request the teacher not to shout at you.

Q3. List 2 things the following 4 shapes remind you of: (5)




Q.4 Put the given below in correct kit.

items the

(7.5)

Soap, needle, buttons, cotton, towel, bandaid, toothpaste, scissors, dettol, shampoo, bandages, thread, toothbrush, medicines, measuring tape



_____	_____	_____
_____	_____	_____
_____	_____	_____
_____	_____	_____

Q.5 Fill in the boxes, using either THANK YOU, SORRY OR PLEASE (5)




I was rude to a friend.



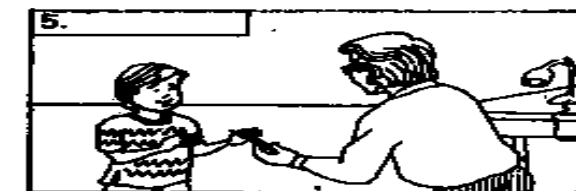
I broke a lovely vase.



I'm receiving a birthday gift.




Sheila wants to enter the classroom.



My father gave me a new pencil.



Kuldip helped Ram open the bottle.



I want a slice of the cake.



Raj has hurt Dev.



Ramu brought me a glass of water.



Peter spilt ink on Arvind's book.

**Q.6 Tick the correct answer**

**(2.5)**

- A Which of the following animals will you see mostly in the rainy season.
- 1 Mosquito
  - 2 Earthworm
  - 3 Housefly
  - 4 Butterfly
- B Spot the odd one out
- 1 Earth
  - 2 Venus
  - 3 Moon
  - 4 Mars
- C Which of the following is not the natural fibre.
- 1 Cotton
  - 2 Wool
  - 3 Silk
  - 4 Nylon
- D In which season will you see rainbow?
- 1 Summer
  - 2 Winter
  - 3 Rainy
  - 4 Spring
- E Your mother has spread the wet cloths. They get dry faster in which season?
- 1 Winter
  - 2 Monsoon
  - 3 Spring
  - 4 Summer

**Q.7 Fill in the blanks**

**(5)**

- A If good is to bad, happy is to \_\_\_\_\_
- B Mother is to father, uncle is to \_\_\_\_\_
- C Shampoo is to hair, paste is to \_\_\_\_\_
- D Lie is to truth, cruel is to \_\_\_\_\_
- E Woollens are to winters, cottons are to \_\_\_\_\_




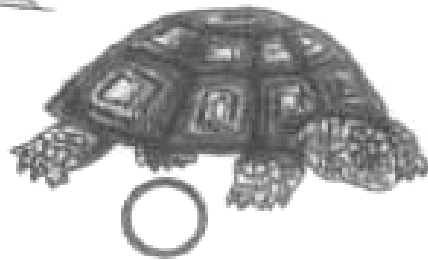


**Q.8 Who am I?**

**(4)**

- A An animal that eat only plants. \_\_\_\_\_
- B A common black bird. \_\_\_\_\_
- C An animal that lives on land and in water. \_\_\_\_\_
- D Indians national bird. \_\_\_\_\_

9 Identify the living and non-living things

(5)



**Q.10 Label the parts of the plant**

**(4)**

