

SWAMINARAYAN VIDYAPITH

CLASS V

Model Papers

ENGLISH

Total Marks: 50

Time: 40 minutes

Q1. Nasiruddin and the Pot

[6]

One day Nasiruddin borrowed a pot from his neighbour Ali. The next day he brought it back with another little pot inside. "That's not mine," said Ali. "Yes, it is," said Nasiruddin. "While your pot was staying with me, it had a baby."

Some time later Nasiruddin asked Ali to lend him a pot again. Ali agreed, hoping that he would once again receive two pots in return. However, days passed and Nasiruddin had still not returned the pot. Finally Ali lost patience and went to demand his property. "I am sorry," said Nasiruddin. "I can't give you back your pot, since it has died." "Died!" screamed Ali, "how can a pot die?" "Well," said Nasiruddin, "you believed me when I told you that your pot had had a baby."

On the basis of your reading of the passage tick the correct option from the answers given below:

1 Who was the owner of the pot?

- Nasiruddin
- Ali
- the baby

2 How many times did Nasiruddin borrow the pot?

- once
- twice
- three times

3 How many pots did he give back the first time?

- none
- one
- two

4 Why was the neighbour happy to lend his pot a second time?

- He was greedy.
- He was a good neighbour.
- He had lots of spare pots.

5 How many pots did Nasreddin return the second time?

- none
- one
- two

6 What probably happened to the pot?

- It died.
- The neighbour took it back.
- Nasreddin kept it.

Q.2 Write sentences using the words given in the brackets.

(in, on, under, over)

(4)

1. _____

2. _____

3. _____

4. _____

Q.3 Punctuate the following sentences

(4)

1. raju and rema enjoyed flying kites on sunday

2. did you like the movie

Q.4 Look at the picture and write down the sentences in indirect speech. (4)





Q.5 Write the opposite of

a) enemy _____

b) upper _____

c) increase _____

d) eldest _____

(4)

Q.6 Change the sentences using plural form of underlined words. (2)

SWAMINARAYAN VIDYAPITH

CLASS V

Model Papers

MATHEMATICS

Total Marks: 50

Time: 40 minutes

All calculations and work must be clearly shown in the margin provided next to each question.

Q1.
[10]

Fill in the blanks.

i) $(21 \times 3) + (21 \times 10) = \dots\dots\dots$

ii) $\dots\dots\dots$ comes after 4000.

ii) $35 \times 100 = \dots\dots\dots$

iii) $\frac{1}{2}$ of 26 = $\dots\dots\dots$

iv) 1600 gms = $\dots\dots\dots$ kg $\dots\dots\dots$ gms

v) L.C.M. of 4 and 8 is $\dots\dots\dots$

Put the appropriate sign i.e. =, x, +, - or \div in the box

v) 40 $80/2$

vi) 76 $24 = 100$

vii) 55 $4 = 220$

viii) 70 $5 = 14$

ix) 4.3 $1.2 = 3.1$

Q2. **State whether true (T) or false (F) in the space provided for each statements.**
[10]

i) $7\frac{1}{2} = \frac{10}{2}$

ii) A line has two end points.

iii) $\frac{1}{3} + \frac{1}{2} = \frac{1}{5}$

iv) $89.32 > 893.2$

v) $30 \times 60 = 1800$

vi) 2 hours = 100 minutes

vii) $60 \times 90 = 600 \times 9$

viii) 2 weeks have 15 days.

ix) A rectangle has 4 sides.


Working Space

x) $7802 = 7 \text{ thousand} + 8 \text{ hundred} + 2 \text{ ones}$



Working Space

Q3. Measure the line-segments in the given figure and hence calculate the perimeter:
[6]



AB = _____ cm.

BC = _____ cm.

CD = _____ cm.

DA = _____ cm.

Perimeter = _____ cm.

Q4.
[12]



A Town

The population residing in a town consisted of

Working Space

Men	- 45,075
Women	- 39,681
Girls	- 1,392
Boys	- 3,136

- a) What is the total population of the town? →
- b) What is the population of adults in the town? →
- c) How many more men are there than women? →
- d) How many children are there in the town? →
- e) How many more women are there than girls? →
- f) What is the total number of men, women and girls in the town? →

Q5. How many mangoes are there in 7 baskets if each basket contains 45 mangoes?
[4]

Working Space

Q6. 12 vans can carry 144 people. How many people can one such van carry?
[4]

Q7. Subtract the largest 3-digit number from the smallest 5-digit number.
[4]

SWAMINARAYAN VIDYAPITH

CLASS V

Model Papers

LIFE SKILLS

Total Marks: 50

Time: 40 minutes

Q1. What would you do in each of these situations? Tick only one from the options provided, in the box. (10)

a) Your classmate is absent from school for a long time. You

1. Try to find out from other classmates what is wrong
2. Do not really notice his/her absence unless she/he is a special friend
3. Tell your parents and call or visit her/ him
4. Hope she/he stays away longer because you will do better in class

b) You are good at a particular subject. You

1. Will give your book to anyone to copy from it
2. Explain to others, but tell them to try on their own
3. Boast about your good results
4. Laugh at others who are not good at the subject

c) **Your younger brother is badly hurt while playing. Your parents are not at home. You**

1. Phone your Doctor
2. Phone your parents and wait till they come back
3. Ask a neighbour to help with bandaging the wound
4. Shout at him for being irresponsible

d) Your younger sister/brother is becoming very selfish. You

1. Shout at her/him
2. Ignore the habit and behaviour
3. Tell your parents about it

4. Explain to her/him that sharing is a good habit

e) Your friend who had borrowed your crayons, loses them. You

1. Stop talking to her/him

2. Take his/ her crayons from his/her bag

3. Ask your parents to buy new ones

4. Talk to your friend because you are feeling bad and then forget about it

f) In the park you favorite aunt buys an ice cream for you and herself. She throws the wrapper on the street. You

1. Ignore it and let it be

2. Tell her that it is wrong and that she should pick it up

3. Throw yours on the street too

4. Pick it up and tell her that you did that because it is right

g) Your cousin is visiting your house for one day. You have not been able to do your homework. You

1. Don't go to school the next day

2. Ask your parents to speak to the teacher

3. Tell your teacher at school that you were ill so were not able to do homework

4. Ask you teacher to give you an extra day

h) You have been invited for lunch to your aunty's house. The food is not cooked properly. You

1. Make excuses to aunty for not eating

2. Tell your mother why you are not eating

3. Make fun of her cooking

4. Eat and say that the food is good

i) Nidhi's mother is very ill. Nidhi is very sad. You want to play. You

1. Tell her to come over to your house

2. Leave her alone

3. Tell her that her mother will get okay and that she should come out to play

4. Sit with her for a while

j) By mistake, you break your mother's perfume bottle. You


- 1. Tell her at once
- 2. Keep quiet and not tell her
- 3. Blame the maid when asked
- 4. Tell her when she asks

Q.2 List 5 different ways in which you can use old match -box (5)

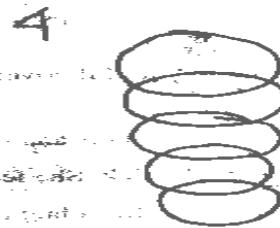
- 1. _____
- 2. _____
- 3. _____
- 4. _____
- 5. _____

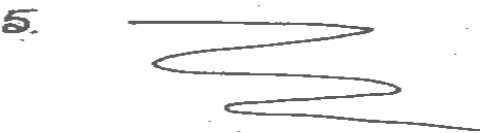
Q.3 What 2 things do each of these shapes remind you of: (5)











..5..

Q.4 Answer the following

(5)

A Which of these has been put under the wrong heading? Circle that.

Solid	Liquid	Gas
Pencil	Soft drink	steam
Biscuit	Chocolate bar	Ice cube

Tick the correct answer.

B Which of these is an important functions of root of a plant?

- 1 To absorb oxygen from the atmosphere
- 2 To absorb carbon-di-oxide from the soil
- 3 To absorb water and mineral from the soil
- 4 To transport water and minerals to different part of the plant

C The teacher asks her students to measure the length of the classroom

- 1 You will measure it by counting your steps
- 2 You will measure it using a skipping rope
- 3 You will measure it using a measuring tape
- 4 You will measure it using a measuring jug

D Fishes have gills, in the same way birds have

- 1 beaks
- 2 feathers
- 3 lungs
- 4 nose

E A desert plant that needs very little water is the

- 1 Neem
- 2 Cactus
- 3 Peepal
- 4 Gulmohar

Q.5 Fill in the blanks

(5)

Fins is to fish, _____ is to birds

Calf is to cow, _____ is to hen

Minute is to hour, _____ is to month

Caterpillar is to butterfly, _____ is to frog.

Earthworm is to soil, _____ is to water

Q.6 Classify the following habits as good and bad habits. (6)

- 1 Covering the face while sleeping
- 2 Biting the nails
- 3 Cleaning teeth after eating meal
- 4 Putting finger inside the nose

- 5 **Wearing clean cloths**
- 6 Watching T.V. for long hours

Good habit	Bad habit

Q.7 You are going for a 3-day school trip to the hills. (5)

From the list given below tick which **5 things** you should definitely pack and take with you.

- a) Toothbrush
- b) Perfume
- c) Towel
- d) Your pencil box
- e) Extra changes of clothes
- f) Textbooks
- g) Band aids
- h) Favourite teddy bear
- i) Diary with emergency telephone numbers
- j) Party frock

Q8 Imagine the feelings of people in the sentences. Fill in the blanks from the words given below.

(5)

alone, happy, calm, sad, joyful, loved, hurt, anger, ashamed, ignored

1. Geeta tries to skip and falls and her friends laugh at her. She feels _____
2. Radha's pet dog falls sick. She feels _____
3. Seema's mother gives her a hug in the morning, she feels _____
4. Johnny gets the first prize in drawing, he feels _____
5. When you are rude to your neighbours, your parents feel _____
6. When Ashima has no one to play with, she feels _____
7. When you pray to God everyday, you feel _____
8. When your parents are too busy to spend time with you, you feel _____
9. When Sunil refuses to study for his exam, his parents feel _____
10. When Nitin's mother buys him a new shirt, he feels _____

Q.9 How many jobs can this man do? Mention any four

(4)