

SWAMINARAYAN VIDYAPITH

CLASS VI

Model Papers

ENGLISH

Total Marks: 50

Time: 40 minutes

Q.1 All the words in the following glidogram end in id. There are clues to help you. The first one is done as an example. (16)

L	I	D					
		I	D				
			I	D			
				I	D		
					I	D	
				I	D		
			I	D			
		I	D				
	I	D					

The top of a container

To slip on a wet road

Not in the form of liquid or gas.

Very nasty

A disease.

Neither solid nor gas

Clear and colourful

He _____ Rs 100 for a new shirt yesterday

A baby goat.

Do as Instructed:

Q.2 Change the speech from indirect to direct. (2)

1) The students said that they were waiting for the teacher.

Q.3 Punctuate. (2)

1) rohan sent me a parcel of books from calcutta.

Q.4 Fill in the blanks using correct form of verb given in the bracket : (2)

- 1) My friend usually _____ me on Sundays.(phone)
- 2) I was late to school yesterday as the bus _____ down on the way.(break)

Q.5 Correct the spellings: (4)

- carefully _____
- acheivement _____
- soldiers _____
- Janaury _____

Q.6 Use appropriate articles a, an, the : (4)

- a) I read this book _____ week ago.
- b) The manager of this hotel is _____ honest person.
- c) _____ Ganges flows from the Himalayas.
- d) I bought _____ envelope from the post office.

Q.7 Make sentences with the following words. (6)

i) ill mannered

ii) up and down

iii) all of a sudden

Q.8 Complete the given proverbs: (4)

- 1) An apple a _____
- 2) A stitch in time _____
- 3) Make _____ while the sun shines.
- 4) Haste make _____

SWAMINARAYAN VIDYAPITH

CLASS VI

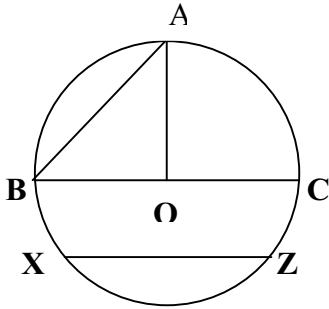
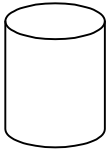
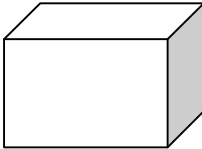
Model Papers

MATHEMATICS

Total Marks: 50

Time: 40 minutes

All calculations and work must be clearly shown in the margins provided, next to each question.

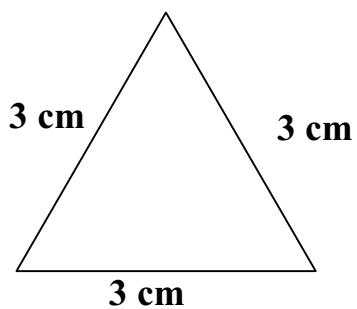
<p>Q.1 [5]</p>	<p>Look at the figure and fill in the blanks</p>  <p>i) The diameter of this circle is _____</p> <p>ii) OA is called the _____ of the circle..</p> <p>iii) The longest chord in the circle is _____.</p> <p>iv) The section of the circumference between A and B is called _____.</p> <p>v) XZ is a _____.</p>	<p>Working space</p>
<p>Q.2 [3]</p> <p>[2]</p>	<p>Answer the following</p> <p>a) Using your ruler and pencil construct an acute angle. Measure it with the help of your protractor.</p> <p>b) Look at the following shapes and write their names</p> <p>a)  b) </p> <p>Ans. _____</p>	

Q.3
[6]

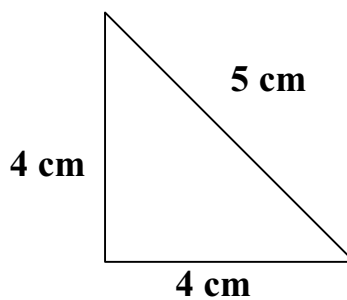
Observe the following triangles and write down the types of triangles based on their sides as well as their angles

Working Space

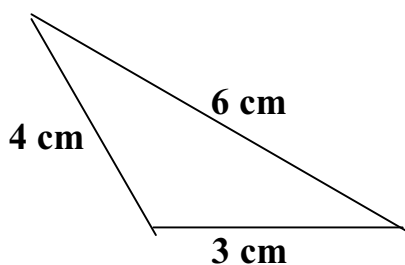
a).



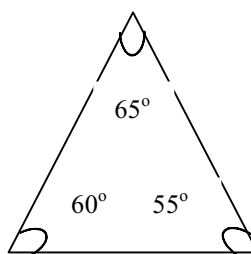
b).



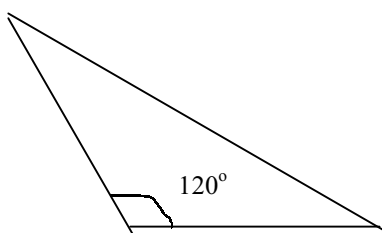
c).



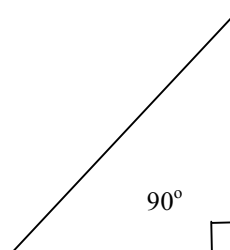
d).



e).



f).



Q.4 [8]	a) Kamlesh scored 115 runs in one match, 29 in the second, 97 in the third, 20 runs in the fourth, 140 runs in the fifth and 55 runs in the sixth. What is his average score?	Working Space
	b) Find the average of the first five multiples of 10	
Q.5 [8]	Answer the following questions i) Solve the following: - a. $\frac{61}{9} - \frac{11}{3}$	

$$b. 3\frac{7}{9} + 5\frac{8}{9}$$

[4] ii) Subtract the difference of 8.647 and 5.82 from the sum of 10.4 and 21.39.

[4] iii) Express the following as single decimal fractions.

a. $60 + 7 + \frac{5}{10} + \frac{5}{100} =$

b. $6 + 70 + 0.4 + 0.03 + 0.005 =$

c. $5 + \frac{1}{10} + \frac{2}{100} + \frac{3}{1000} =$

[4] $7 + 0.5 + 0.07 + 0.008 =$ _____

iv) There are 70 students in a class. If 20% of them are boys then find the number of girls.

[6] v) Mrs. Rampyari wants to find out the profit or loss incurred by her fabric store at the end of the month. Help her by filling out the following table.

Item	CP (Rs.)	SP (Rs.)	Profit (Rs.)	Loss (Rs.)
Bed Sheet	380	356		
Pillow cover	50	42.50		
Curtain	1098	954.25		

SWAMINARAYAN VIDYAPITH

CLASS VI

Model Papers

LIFE SKILLS

Total Marks: 50

Time: 40 minutes

Q1. What would you do in each of these situations? Tick only one from the options provided, in the box. (10)

a) Your classmate is absent from school for a long time. You

1. Try to find out from other classmates what is wrong
2. Do not really notice his/her absence unless she/he is a special friend
3. Tell your parents and Call or visit her/ him
4. Hope she/he stays away longer because you will do better in class

b) You are good at a particular subject. You

1. Will give your book to anyone to copy from it
2. Explain to others, but tell them to try on their own
3. Boast about your good results
4. Laugh at others who are not good at the subject

c) Your younger brother is badly hurt while playing. Your

parents are not at home. You

1. Phone your Doctor
2. Phone your parents and wait till they come back
3. Ask a neighbour to help with bandaging the wound
4. Shout at him for being irresponsible

d) Your younger sister/brother is becoming very selfish. You

1. Shout at her/him
2. Ignore the habit and behaviour
3. Tell your parents about it
4. Explain to her/him that sharing is a good habit

e) Your friend who had borrowed your crayons loses them.

You

1. Stop talking to her/him
2. Take his/ her crayons from his/her bag
3. Ask your parents to buy new ones
4. Talk to your friend because you are feeling bad and forget about it

f) In the park you favorite aunt buys an ice cream for you and herself. She throws the wrapper on the street. You

1. Ignore it and let it be
2. Tell her that it is wrong and that she should pick it up
3. Throw yours on the street too
4. Pick it up and tell her that you did that because it is right

g) Your cousin is visiting your house for one day. You

have not been able to do your homework. You

1. Don't go to school the next day
2. Ask your parents to speak to the teacher
3. Tell your teacher at school that you were ill so were not able to do homework
4. Ask you teacher to give you an extra day

h) You have been invited for lunch to your aunty's house.

The food is not cooked properly. You

1. Make excuses to aunty for not eating
2. Tell your mother why you are not eating
3. Make fun of her cooking
4. Eat and say that the food is good

i) Nidhi's mother is very ill. Nidhi is very sad. You want to play. You

1. Tell her to come over to your house
2. Leave her alone
3. Tell her that her mother will get okay and that she should come out to play
4. Sit with her for a while

j) By mistake, you break your mother's perfume bottle. You

1. Tell her at once
2. Keep quiet and not tell her
3. Blame the maid when asked
4. Tell her when she asks

Q.2 Fill in the blanks from the words given in the brackets. (5)

- i) Karuna needs to carry hot water. She will use a _____.
(thermos/steel container)
- ii) Madhav is going for a walk up the hill. He will wear his _____.
(sports shoes/school shoes/sandals)
- iii) For Diwali evening Ruchi bought 2 salwar kurtas. She should wear the one made of _____.
(polyester/cotton)
- iv) When putting on the light, your feet and hands should be _____.
(wet/dry)
- v) You will use _____ in cake. (sugar/pepper)

Q.3 List 5 different ways in which you can use old greeting-cards (5)

1. _____
2. _____
3. _____
4. _____
5. _____

Q .4.Find – who I am? (4)

1. I am the bird living in the polar region. _____
2. I am the animal living in the desert. _____
3. I help fish to swim. _____
4. I am the largest sea animal. _____

Q.5 Identify non-living things from the given picture.

(5)



Q.6 You are going for a 3-day school trip to the hills.

(5)

From the list given below tick which **5 things** you should definitely pack and take with you.

- a) Toothbrush
- b) Perfume
- c) Towel
- d) Your pencil box
- e) Extra changes of clothes
- f) Textbooks
- g) Band aids
- h) Favorite teddy bear
- i) Diary with emergency telephone numbers
- j) Party frock

Q.7 Select the correct option

(5)

A Matter exists in _____ state.

- 1. Two
- 2. Three
- 3. Four
- 4. Six

B _____ part of the plant prepare food.

- 1. Root
- 2. Flower
- 3. Fruit
- 4. Leaf

C The moon produces no light, and yet it shines at night. This is because

- 1. The moon gets the light from the sun
- 2. The moon is covered with a thin layer of ice
- 3. The moon has many craters
- 4. The moon has many tube lights

D Cloth is to meter, as milk is to _____

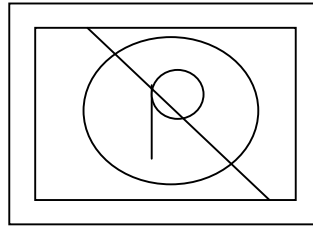
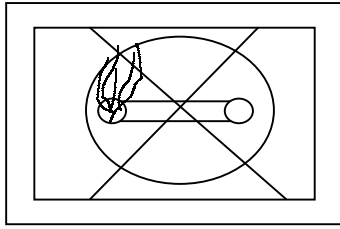
- 1 Chain
- 2 Litre
- 3 Glass
- 4 Kg

E During respiration animals gives out

- 1 Oxygen
- 2 Carbon Dioxide
- 3 Water
- 4 None of these

Q.8 See these signs 'What do they mean?'

(2)



Q.9 Find the following words in the word search

(6)

Heart, Skin, Ear, Nose, Lung, Brain

B	O	A	H	Q	R	O	P	Z
R	R	S	E	N	T	P	L	X
A	S	E	A	R	S	L	U	W
I	T	K	R	P	K	N	N	Y
N	P	L	T	L	I	Z	G	Z
R	S	T	U	V	N	O	S	E

Q.10 How many jobs can this man do? Mention any three.

(3)