


DATE :

1) Look at the picture and write 5 sentences about it. Give a title.



2) Name the homes of the following animals:

1. Bird _____

2. Dog _____

3. Cow _____

3) Write the opposite of the following:

1. Strong _____

2. True _____

3. Beautiful _____

4. Rainy _____

4) Punctuate the following sentence:

new delhi is the capital of india.

5) Rewrite these sentences in correct English:

1. The boys jumping over the walls and policemen caught.

2. I keep the fruit in the fridge yesterday.

6) Write the words in alphabetical order:

butter, bloom, bye, baton, biscuit, bright, blank, buried, beach, bottom.

1. _____ 2. _____ 3. _____ 4. _____

5. _____ 6. _____ 7. _____ 8. _____

9. _____ 10. _____

MATHS

IV

DATE :

1) Match the following shapes to their names.




Rectangle



Hexagon



Pentagon



Circle



Triangle



Square

2) Solve the sums.

$$\begin{array}{r} 1) \quad 4 \ 3 \ 6 \ 4 \\ + \quad 4 \ 3 \ 6 \ 4 \\ \hline \end{array}$$

$$\begin{array}{r} 2) \quad 5 \ 0 \ 0 \ 3 \\ - \quad 4 \ 1 \ 4 \ 5 \\ \hline \end{array}$$

$$\begin{array}{r} 3) \quad 3 \ 2 \ 1 \\ \times \quad 1 \ 4 \\ \hline \end{array}$$

4)

$$9 \overline{) 297}$$

$$\begin{array}{r} 5) \quad 2 \ 0 \ 6 \ 3 \\ \times \quad \quad \quad 5 \\ \hline \end{array}$$

3) Write the number name for the following.

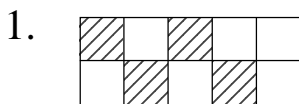
1. 4030 = _____

2. 369 = _____

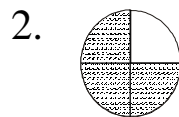
3. 2936 = _____

4. 32030 = _____

4) Write the fraction for the shaded region



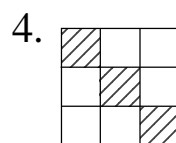
= _____



= _____



= _____



= _____

5) Fill in the blanks.

1. There are _____ minutes in 1 hour.
2. There are _____ hours in a day.
3. In a leap year there are _____ days.
4. 1 Re = _____ paise.
5. 1 metre = _____ cm.
6. $370 \times 0 =$ _____.
7. $151 \times 5 =$ _____ $\times 151$
8. $7436 = 7000 +$ _____ $+ 30 + 6$
9. The smallest 4 digit number is _____.
10. $81 \div 9$ _____.


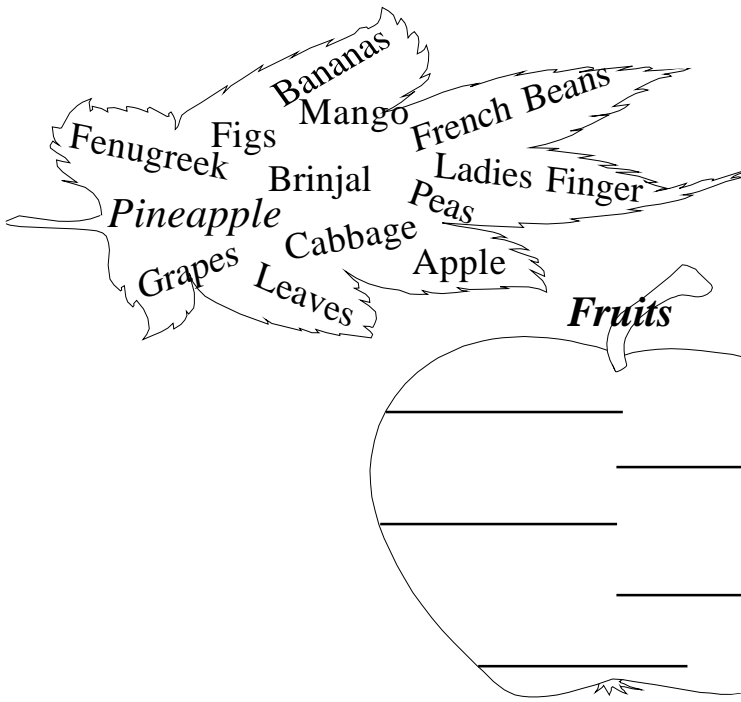
LIFE SKILL

IV

DATE :

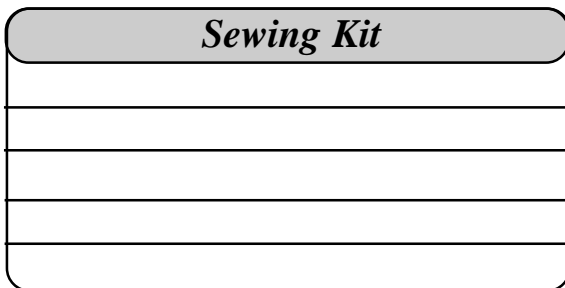
- Q. 1 You have a science test tomorrow and there is a lovely programme on T.V. You will...
- a) Watch T.V. b) Study first and then watch a bit of the programme
c) Study for the test d) Watch T.V. and study late in the night
- Q.2 Your brother eats an ice-cream and then throws the wrapper on the road. You...
- a) Let it be there b) Tell her to pick it up.
c) Throw it in the dustbin d) Tell her it's wrong.
- Q.3 Reena's mother is ill and Reena is sad. You...
- a) Go and play with your friends who are nearby.
b) Play quietly in Reena's house.
c) Sit with Reena.
d) Ask her to come out and play as her mother is resting.
- Q.4 Your brother has broken your favourite toy. You...
- a) Tell your parents
b) Shout at him
c) Tell him not to do it again
d) Break one of his toys.
- Q.5 Shabnam has been ill and so has missed school work. You...
- a) Give her copies if she asks for them.
b) Leave her alone
c) Tell her best friend to help her.
d) Phone her everyday and tell her what she missed.
- Q.6 Fill in the blanks with suitable words:-
- One who teaches is a _____
One who grow crops is a _____
One who paints picture is a _____
One who gives medicine is a _____
One who repairs slippers / shoes is a _____
- Q.7 Imagine you are going for a picnic. Tick five things you definately need to take with you.
- Football, slippers, snacks, water bottle, night suit,
toothbrush, band-aid, camera, Teddy bear

Q.8 Classify the following:



Q.9 Put the correct items from the given below, in the sewing kit.

{ Soap, Button, Needle, Thread, Towel, Shampoo, Scissors, Dettol, Measuring tape, ... }



Q.10 List five things with which you would decorate your room for a birthday celebration.

1. _____
2. _____
3. _____
4. _____
5. _____

Q.11 Which of the following are good habits? Put a mark on them.

