
SWAMINARAYAN VIDYAPITH

MODEL PAPERS

LIFE SKILL

VI

DATE :

Q1. Fill in the blanks from the words given in the brackets:

1. To carry 10 kilos of rice I will need a
(plastic bag/ cloth bag)
2. Pottery is made of
(metal/ clay)
3. You will hang your uniform on a
(hook/ hanger)
4. You will use in tea.
(sugar/ salt)
5. Your friend Mina, has fallen and is hurt. You will take her to the
.....
(hostel/ hospital)
6. To climb down a steep slope, you will need
(skates/ sandals/ sports shoes)

Q2. What would you do in each of these situations? Tick only one option.

1. You are not allowed to use the iron at home. However, you do so and the iron burns out because you left it on. You...
 - a) keep quiet and pretend you know nothing
 - b) tell your mother immediately
 - c) blame the maid
 - d) tell your mother after it has been repaired
2. You find a ten Rupee note lying on the floor of a shop. You...
 - a) give it to a poor child/ person
 - b) keep it for a cold drink or ice cream
 - c) leave it lying there
 - d) ask if it belongs to some one in the shop
3. Your younger brother is badly hurt while playing, your parents are not at home so you...
 - a) phone your Doctor
 - b) phone your parents and wait till they come back
 - c) ask a neighbour to help with bandaging the wound
 - d) shout at him for being irresponsible

Q3. Select the items for your toilet kit and put a ✓ against each:-

- | | |
|-----------------|----------------------|
| a) washing soap | i) needle and thread |
| b) spoons | j) glue sticks |
| c) hooks | k) detergent |
| d) cotton | l) hand towel |
| e) mouth wash | m) story book |
| f) face cream | n) toothbrush |
| g) hair brush | o) sweets |
| h) buttons | |

Q4. How do you use the following things.

1. empty match- boxes.....
2. empty talcum powder tins.....
3. old newspapers.....
4. empty injection bottles.....
5. old greeting and birthday cards.....

Q6. Complete the sentences:

1. Your younger sister has joined your school. She is unable to make friends because she is home sick. You will.....
.....
2. While waiting in a queue for a bath, one girl breaks the line. The girls starts quarrelling. You will.....
.....

Q7. Write five different ways in which you can keep your room clean

- 1.....
- 2.....
- 3.....
- 4.....
- 5.....

SWAMINARAYAN VIDYAPITH

MODEL PAPERS

ENGLISH

VI

DATE : _____

-
-
- 1) Your mother asks you to sleep and puts off the light. You hate being in the dark. Describe in 7-8 sentences how you felt.

- 2) Write the opposite:

1. Quiet _____
2. Answer _____
3. Sharp _____
4. High _____

- 3) Make sentences with the following words:

1. Careful _____
2. Wealthy _____
3. Remember _____

- 4) Circle the wrong spelling:

Receive, Weight, Height, Mamory,



- 5) Punctuate the following:

What did uncle raj bring back from mumbai asked sheila.

-
- 6) Read the paragraph given below.

Ants are the most interesting of all insects because they are so like human beings in many ways. They live in families, build their own houses and work together and have a 'King' and a 'Queen'. Each ant has its own work to do. Thus, they have hunters, soldiers and workers, among them. There are even criminal ants who steal from other worker ants, and carry off their young ones for food.

From the paragraph, pick out at least 3 Nouns and 3 Verbs and fill in appropriate trees below.



SWAMINARAYAN VIDYAPITHMODEL PAPERS

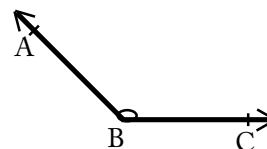
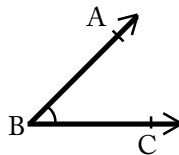
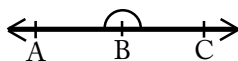
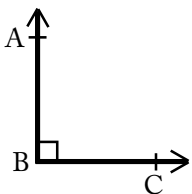
MATHS**VI****DATE :****MARKS :****Name :** _____**Roll No.:** _____

Q.1 Fill in the blanks.

- 1) $220 \text{ cm} = \underline{\hspace{1cm}} \text{ m } \underline{\hspace{1cm}} \text{ cm.}$
- 2) $7642 + \underline{\hspace{2cm}} = 8000$
- 3) $\frac{15}{20} = \frac{3}{\underline{\hspace{1cm}}}$
- 4) $2\frac{1}{3} \div \underline{\hspace{1cm}} = 1$
- 5) Multiplicative inverse of 3 is $\underline{\hspace{2cm}}$.

Q.2

- 1) Add the following :
 $78536 + 252 + 9702$
- 2) Divide :
 $6363 \div 7$
- 3) In one bus there are 65 people. How many people are there in 6 buses?
- 4) Multiply 1.45×2.3
- 5) Convert 0.08 into a fraction

Q.3 Classify the following angles.**Q.4 Measures of 3 angles have been given below. Put a Yes / No to show with which of the group it is possible to draw a triangle.**

- 1) $45^\circ, 30^\circ, 95^\circ$
- 2) $55^\circ, 55^\circ, 70^\circ$
- 3) $110^\circ, 20^\circ, 90^\circ$
- 4) $50^\circ, 60^\circ, 70^\circ$

Q.5 Solve these questions.

- 1) A room is 5.5.m long and 4.5m broad. What is the area of the room?
- 2) What is the volume of a metal cube of side 1cm?